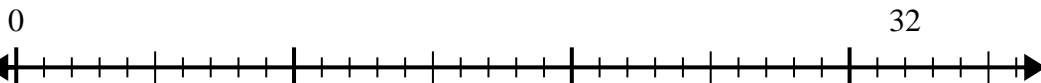




Use the number line to solve the division problem.

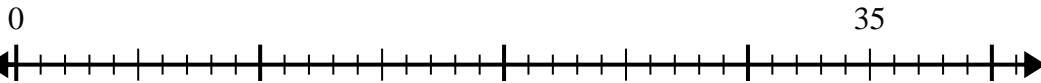
Answers

1) $32 \div 4 =$



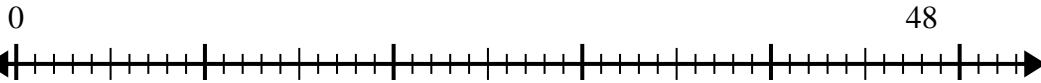
1. _____

2) $35 \div 7 =$



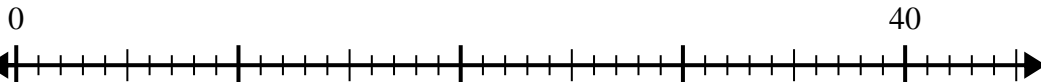
2. _____

3) $48 \div 6 =$



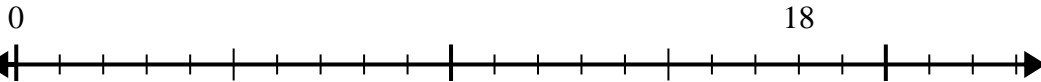
3. _____

4) $40 \div 8 =$



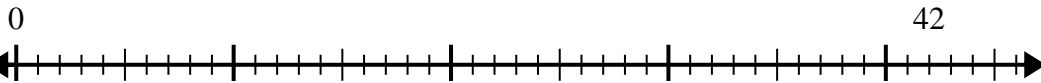
4. _____

5) $18 \div 6 =$



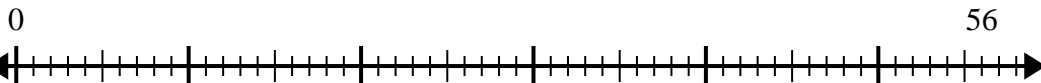
5. _____

6) $42 \div 7 =$



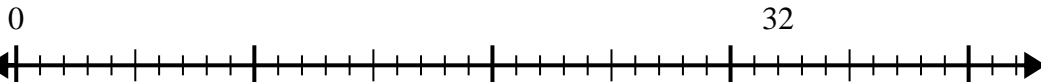
6. _____

7) $56 \div 8 =$



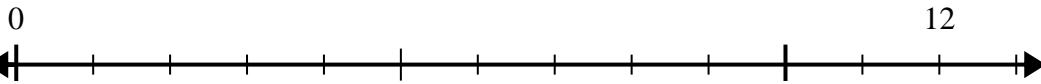
7. _____

8) $32 \div 8 =$



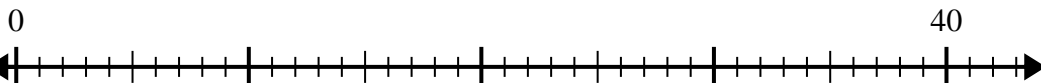
8. _____

9) $12 \div 4 =$



9. _____

10) $40 \div 5 =$

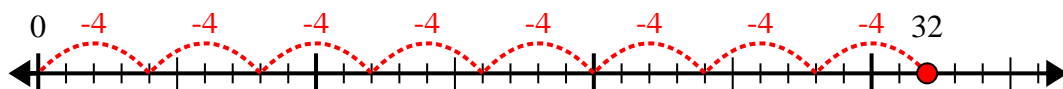


10. _____

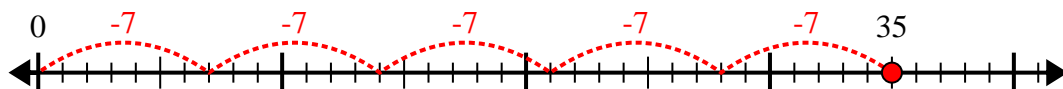


Use the number line to solve the division problem.

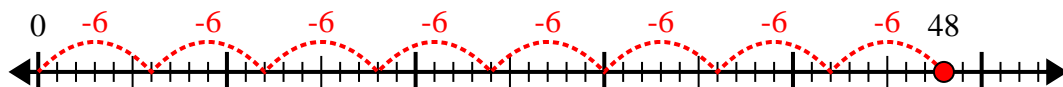
1) $32 \div 4 =$



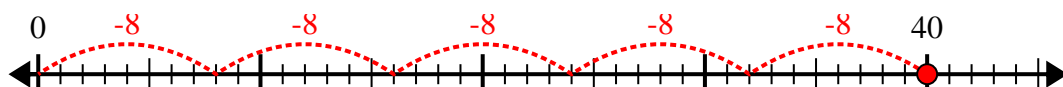
2) $35 \div 7 =$



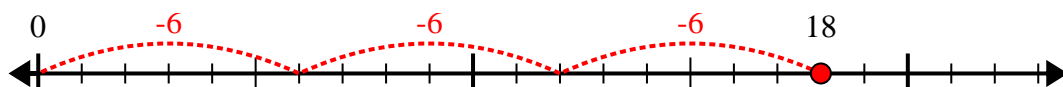
3) $48 \div 6 =$



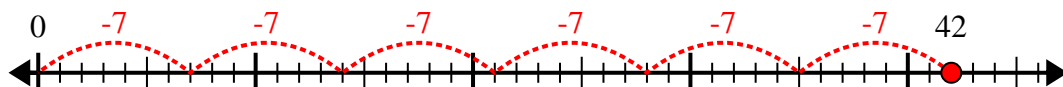
4) $40 \div 8 =$



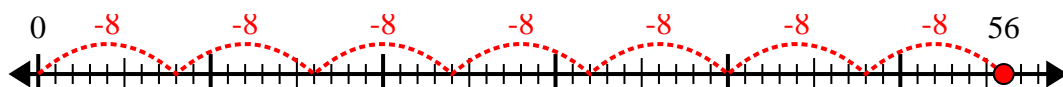
5) $18 \div 6 =$



6) $42 \div 7 =$



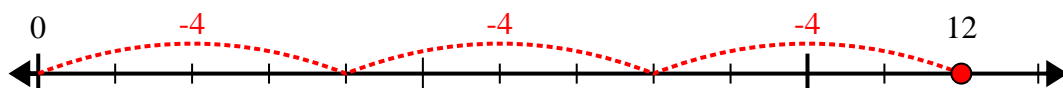
7) $56 \div 8 =$



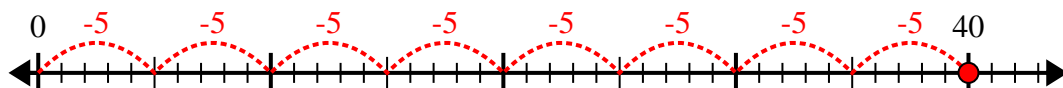
8) $32 \div 8 =$



9) $12 \div 4 =$



10) $40 \div 5 =$



Answers

1. 8

2. 5

3. 8

4. 5

5. 3

6. 6

7. 7

8. 4

9. 3

10. 8